


Day 1

$97 + 75 =$

On Monday, Sarah read 24 pages of her book. On Tuesday night, she read 41 pages, and Wednesday night, she read 32 pages. How many pages did Sarah read altogether?

What time is shown on the clock?



$18 - 5 =$

$98 + 33 =$

Round the following numbers to the nearest 10.

13 _____

21 _____

29 _____

Day 2

Day 3

Mandy made 27 pizzas. She made 16 pepperoni pizzas, 4 cheese pizzas, and the rest were sausage. How many sausage pizzas did Mandy make?

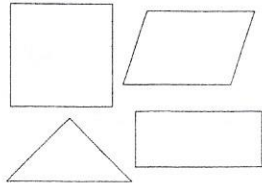
Round the following numbers to the nearest 100.

324 _____

558 _____

256 _____

Color all of the quadrilaterals.




Write the number in standard form.

$500 + 30 + 3$

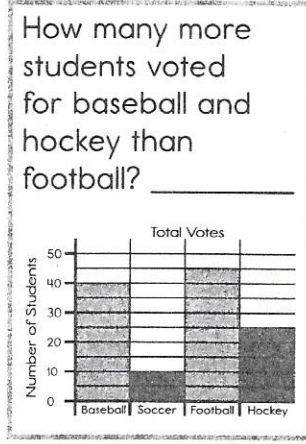
$71 + 13 =$

Look at the base ten blocks. Write the number shown.



Day 4

How many more students voted for baseball and hockey than football?



$45 + 88 =$

Write the missing numbers to complete the pattern.

2, 4, 6, 8,

Becca put 91 books on a shelf. Of the books, 28 were nonfiction, 13 were poetry books, and the rest were fiction books. How many books were fiction?
